

**Equal Groups: Multiplication Sentence**

Write-L1: S1


Write a multiplication sentence to describe each model.

1)




$$\underline{\quad} \times \underline{\quad} = \underline{\quad}$$

2)



$$\underline{\quad} \times \underline{\quad} = \underline{\quad}$$

3)



$$\underline{\quad} \times \underline{\quad} = \underline{\quad}$$

4)



$$\underline{\quad} \times \underline{\quad} = \underline{\quad}$$

5)



$$\underline{\quad} \times \underline{\quad} = \underline{\quad}$$

**Equal Groups: Multiplication Sentence**

Write-L1: S1


Write a multiplication sentence to describe each model.

1)




$$\underline{2} \times \underline{4} = \underline{8}$$

2)



$$\underline{4} \times \underline{3} = \underline{12}$$

3)



$$\underline{3} \times \underline{2} = \underline{6}$$

4)



$$\underline{2} \times \underline{5} = \underline{10}$$

5)



$$\underline{3} \times \underline{3} = \underline{9}$$