





Dorysuj tyle kresek, aby razem było 80.

1



$$60 + \square = 80$$

Na klombie rośnie 90 tulipanów. W nocy rozkwitło 60 tulipanów. Ile jeszcze nie rozkwitło?

2

\_\_\_\_\_

Ile zapłacisz?

3



20 zł

\_\_\_\_\_