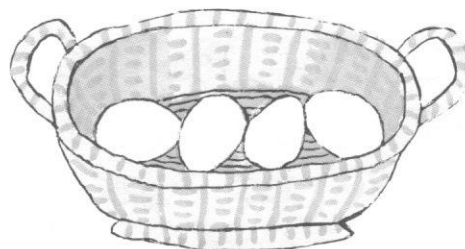



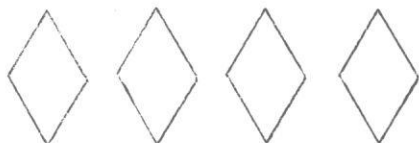

1. Policz, ile jest jajek w obu koszykach. 2. Ile jest razem? 3. Ile było bazi na obu gałązkach? Ile bazi spadło z drugiej gałązki? Ile bazi zostało na pierwszej gałązce? 4. Pokoloruj tyle kurcząt, aby żółtych było razem 14.

14 Ile tu jest?

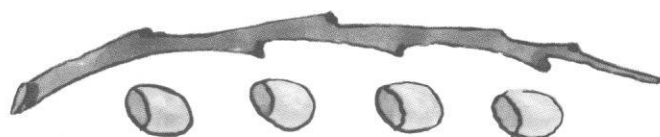
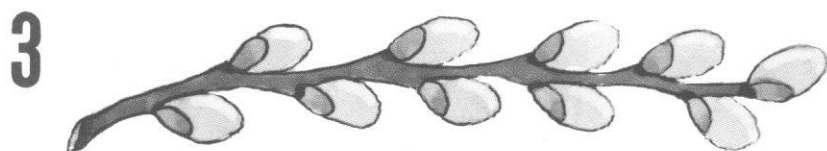


$$10 + 4 =$$



$$14 - 10 = \square$$



$$10 + \square = 14$$



$$14 - \square = 10$$



$$\square + 4 = 14$$