





$$2 + \square + \square = \square$$



$$7 + \square + \square = \square$$



$$1 + \square + \square = \square$$

$$2 + \square + \square = \square$$

$$3 + \square + \square = \square$$

$$5 + \square + \square = \square$$